







Year 4 Home Learning

Spring – Term 4

In the grid below are your different homework tasks for this term. Please choose **at least 4 pieces of homework** to complete this term, to be handed in **by Thursday 2nd April**.

| | | |
|---|---|--|
| <p>Find out about the famous eruption of Mount Vesuvius in 79 CE when the town of Pompeii was destroyed. Present your information however you like – you could make a presentation, a leaflet, a poster.</p> |  | <p style="font-size: 1.2em; color: purple;">your choice</p> <p>YOU DECIDE! Wow me by researching / presenting / drawing / painting / making... anything you like!</p> |
| <p>Create a piece of artwork of a volcano. This could be a drawing, a painting, a collage or even something 3D like a model or a clay sculpture!</p> | <p>Research some other volcanoes from around the world. Some well known ones are Mount Etna, Krakatoa, Mount Fuji, Mount Kilimanjaro.</p> |  |
| <p>Explore the information on this website www.bbc.co.uk/bitesize/articles/zd9cxyc#zppybat and write 10 facts you find out from the website.</p> | <p>Write a newspaper report about the eruption of Mount Vesuvius in 79 CE. This should be set in the Roman times. Remember to include a newspaper title, a headline, a date, a quote and a picture!</p> |  |
| <p>Practise the short multiplication column method to answer these questions:</p> | | |
| <p>1) During an eruption of Mount Etna, scientists collected 124 lava rocks each day for 3 days. How many lava rocks did they collect altogether?</p> | <p>2) An eruption of Mount Vesuvius sent 215 tonnes of ash into the air each hour for 6 hours. How many tonnes of ash were released in total?</p> | <p>3) Each day, 326 visitors hike up Mount Fuji. How many visitors hike up the mountain in 5 days?</p> |
| <p>4) After an eruption of Mount St. Helens, a rescue team delivered 237 bottles of water each day for 3 days. How many bottles of water did they deliver altogether?</p> | <p>5) Scientists measuring activity at Mount Kilimanjaro recorded 412 metres of lava flow each day for 4 days. How many metres of lava flow did they record in total?</p> | |

| | | |
|---|---|---|
|  |  |  |
| <p>Log in to Spelling Shed to practise your spellings.</p> | <p>Practise your times tables online.</p> | <p>You should be reading at home at least 4 times each week. When you've finished a book, you will need to do a quiz in school so remember to ask! Remember, we will update our reading journals in school every Monday!</p> |