


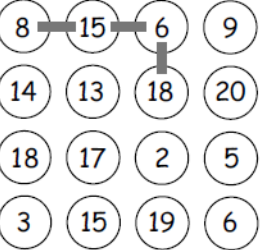






# Year 5 Home Learning Menu Term 1

Please complete 5 tasks this term.

<p>During the Victorian times, children would have been sent to work in a range of places. I would like you to create a poster advertising one of the jobs the children would have done – can you make it sound interesting and exciting? Try to be persuasive!</p>	<p>Mrs Choy spent exactly £10 on 100 eggs for her shop.</p> <p>Large eggs cost her 50p each. Medium eggs cost her 10p each. Small eggs cost her 5p each.</p> <p>For two of the sizes, she bought the same number of eggs. How many of each size did she buy?</p> 	<p><b>Your CHOICE</b></p> <p>YOU DECIDE! Wow me by researching /presenting / drawing / painting / making.... Anything you like on our themes of Forces, The Victorians... or something completely different!</p>
<p>Can you design &amp; make a toy that a Victorian child may have had? Remember that poor children would have used scrap or old items that they found to make toys and games to entertain themselves.</p> <p><a href="https://victorianchildren.org/victorian-toys-and-victorian-games/">https://victorianchildren.org/victorian-toys-and-victorian-games/</a></p> 	<p>The answer is 132.</p> <p>Write ten questions that could go with this answer. Use a variety of + - x and ÷</p>	<p>What can you find out about one of these famous Victorians? -</p> <ul style="list-style-type: none"> <li>• Queen Victoria</li> <li>• Charles Dickens</li> <li>• Isambard Kingdom Brunel</li> <li>• George Stephenson</li> <li>• Robert Louis Stevenson</li> <li>• Alexander Graham Bell</li> <li>• Florence Nightingale</li> </ul> 
 <p>Join any four numbers and find their total. Joins can go up, down or sideways, but not diagonally. eg: the score shown is <math>8 + 15 + 6 + 18 = 47</math></p> <p>Have at least 10 goes. Find the highest possible score. Find the lowest possible score.</p>	<p>Design a machine that can travel in time. Choose 5 “times” you would like to visit. The Ancient Egyptians? The dinosaurs? The Moon landing? Can you explain why and say what you would do when you visited each time.</p> 	
 <p>Don't forget to practice your times tables regularly.</p>	 <p>You should be reading at home for 30 minutes 4 times a week. Make sure you record what you are reading and complete the quiz when you are finished.</p>	<p><b>Spelling Shed</b> </p> <p>You can practise your spellings online.</p>